


Name - _____


Start time - __ : __

End time - __ : __


Write down the missing number based on the sequence below.



3		5		7
---	--	---	--	---




	10	11		
--	----	----	--	--



22				26
----	--	--	--	----




16		18		
----	--	----	--	--



35	36			
----	----	--	--	--



48			51	
----	--	--	----	--



59		61		63
----	--	----	--	----

1

2

3

4

5

6

7

8

9