


Name - \_\_\_\_\_


Start time - \_\_\_ : \_\_\_

End time - \_\_\_ : \_\_\_


Write the numbers in ascending order.




--	--	--	--




--	--	--	--




--	--	--	--




--	--	--	--




--	--	--	--




--	--	--	--



--	--	--	--



--	--	--	--



--	--	--	--

1      2      3      4      5      6      7      8      9