









Name - _____

Start time - ___ : ___

End time - ___ : ___

Subtract the given numbers by crossing out the objects .

 $6 - 5 = \square$	 $4 - 2 = \square$
 $8 - 6 = \square$	 $5 - 2 = \square$
 $4 - 1 = \square$	 $7 - 5 = \square$
 $6 - 6 = \square$	 $9 - 1 = \square$

1 2 3 4 5 6 7 8 9