


Name - _____

Start time - ___ : ___

End time - ___ : ___


Cross out the objects to find the answer.




$$5 - 2 =$$




$$5 - 4 =$$




$$4 - 1 =$$



$$7 - 5 =$$




$$6 - 3 =$$



$$4 - 4 =$$



$$3 - 2 =$$



$$8 - 6 =$$

1 2 3 4 5 6 7 8 9