


Name - _____


Start time - ___ : ___

End time - ___ : ___


Add circle to make ten. Write how many too complete the equations.




_____ + 5 = 10




4 + _____ = 10




_____ + 5 = 10



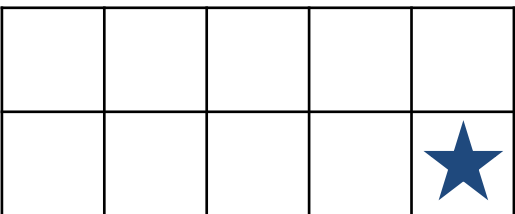
_____ + 3 = 10




6 + _____ = 10



8 + _____ = 10



_____ + 1 = 10



_____ + 9 = 10

1

2

3

4

5

6

7

8

9