


Name - \_\_\_\_\_

Start time - \_\_\_ : \_\_\_


End time - \_\_\_ : \_\_\_

## Solve the following.


1. There are 8 apples on the table. 3 apples are red, and the rest are green. How many green apples are there?




2. Jenny has 8 colorful balloons. She gave 4 balloons to her sister. How many balloons does Jenny have left?




3. There are 12 shiny buttons, and 6 buttons rolled away. How many buttons are still there?




4. Sally has 15 candies, and she gave 7 candies to her brother. How many candies does Sally have left?




5. Jenny has 7 dolls. She gave 4 dolls to her friend. How many stickers does Jenny have left?




1

2

3

4

5

6

7

8

9