



Name - _____


Start time - ___ : ___


End time - ___ : ___

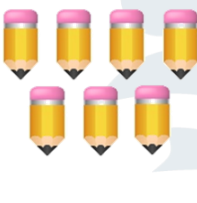
Subtract the following pairs of numbers.


$$\begin{array}{r} 6 \\ - 4 \\ \hline \end{array}$$



$$\begin{array}{r} 8 \\ - 3 \\ \hline \end{array}$$



$$\begin{array}{r} 9 \\ - 6 \\ \hline \end{array}$$


$$\begin{array}{r} 5 \\ - 2 \\ \hline \end{array}$$


$$\begin{array}{r} 7 \\ - 6 \\ \hline \end{array}$$


$$\begin{array}{r} 10 \\ - 4 \\ \hline \end{array}$$


$$\begin{array}{r} 4 \\ - 2 \\ \hline \end{array}$$


$$\begin{array}{r} 6 \\ - 1 \\ \hline \end{array}$$


1

2

3

4

5

6

7

8

9