



Name - \_\_\_\_\_

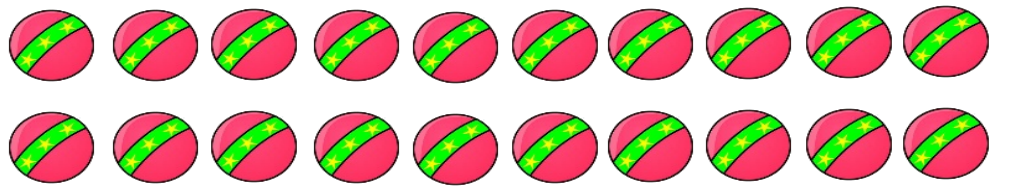
Start time - \_\_\_ : \_\_\_


End time - \_\_\_ : \_\_\_


Subtract the following pairs of numbers vertically:

	$\begin{array}{r} 19 \\ - 12 \\ \hline \end{array}$
	<input style="width: 100px; height: 30px; border: 1px solid black;" type="text"/>

	$\begin{array}{r} 28 \\ - 18 \\ \hline \end{array}$
	<input style="width: 100px; height: 30px; border: 1px solid black;" type="text"/>

	$\begin{array}{r} 20 \\ - 11 \\ \hline \end{array}$
	<input style="width: 100px; height: 30px; border: 1px solid black;" type="text"/>

	$\begin{array}{r} 17 \\ - 12 \\ \hline \end{array}$
	<input style="width: 100px; height: 30px; border: 1px solid black;" type="text"/>

	$\begin{array}{r} 22 \\ - 13 \\ \hline \end{array}$
	<input style="width: 100px; height: 30px; border: 1px solid black;" type="text"/>

1      2      3      4      5      6      7      8      9