


Name - _____

Start time - ___ : ___

End time - ___ : ___


Subtract the given numbers by crossing out the objects .



$$33 - 12 = \square$$




$$27 - 15 = \square$$




$$35 - 9 = \square$$



$$25 - 11 = \square$$




$$30 - 19 = \square$$



$$29 - 14 = \square$$



$$22 - 6 = \square$$



$$20 - 15 = \square$$