








Name - _____

Start time - ___ : ___

End time - ___ : ___

Cross out the correct number of circles to solve each subtraction.

$14 - 6 = \underline{\quad}$	
$20 - 9 = \underline{\quad}$	
$22 - 14 = \underline{\quad}$	
$16 - 4 = \underline{\quad}$	
$15 - 12 = \underline{\quad}$	
$13 - 7 = \underline{\quad}$	
$12 - 5 = \underline{\quad}$	

1

2

3

4

5

6

7

8

9