
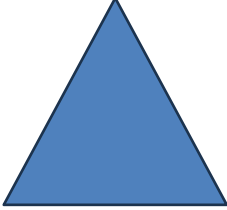








Name - \_\_\_\_\_

Start time - \_\_\_ : \_\_\_

End time - \_\_\_ : \_\_\_

Identify the 2D shapes and check the appropriate boxes.

 <ul style="list-style-type: none"><li><input type="checkbox"/> square</li><li><input type="checkbox"/> triangle</li><li><input type="checkbox"/> circle</li></ul>	 <ul style="list-style-type: none"><li><input type="checkbox"/> circle</li><li><input type="checkbox"/> triangle</li><li><input type="checkbox"/> hexagon</li></ul>
 <ul style="list-style-type: none"><li><input type="checkbox"/> rectangle</li><li><input type="checkbox"/> triangle</li><li><input type="checkbox"/> trapezoid</li></ul>	 <ul style="list-style-type: none"><li><input type="checkbox"/> square</li><li><input type="checkbox"/> hexagon</li><li><input type="checkbox"/> triangle</li></ul>
 <ul style="list-style-type: none"><li><input type="checkbox"/> square</li><li><input type="checkbox"/> triangle</li><li><input type="checkbox"/> oval</li></ul>	 <ul style="list-style-type: none"><li><input type="checkbox"/> rectangle</li><li><input type="checkbox"/> triangle</li><li><input type="checkbox"/> pentagon</li></ul>
 <ul style="list-style-type: none"><li><input type="checkbox"/> hexagon</li><li><input type="checkbox"/> trapezoid</li><li><input type="checkbox"/> circle</li></ul>	 <ul style="list-style-type: none"><li><input type="checkbox"/> square</li><li><input type="checkbox"/> triangle</li><li><input type="checkbox"/> oval</li></ul>

1

2

3

4

5

6

7

8

9