


Name - \_\_\_\_\_

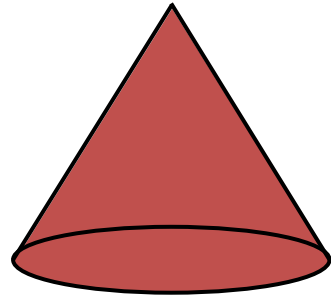
Start time - \_\_\_ : \_\_\_

End time - \_\_\_ : \_\_\_


Encircle the correct name of the 3D shape.




Cube      sphere



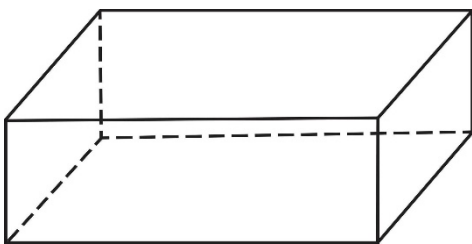
Cone      prism



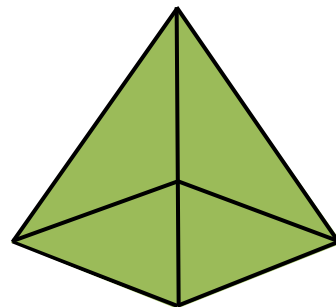
Cuboid      pyramid



Cube      cylinder



rectangular prism      cube



pyramid      prism

1

2

3

4

5

6

7

8

9