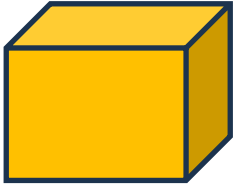


Name - _____

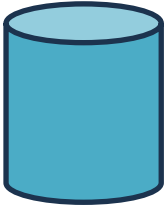
Start time - ___ : ___

End time - ___ : ___

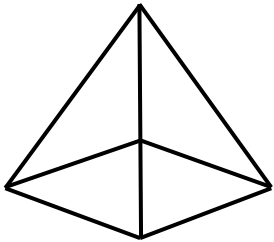
Match each 3D shape with its name.




Sphere



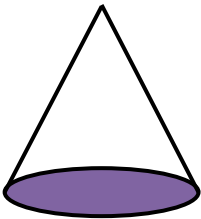
Cuboid




Cylinder



Cube



Square pyramid



Cone

1

2

3

4

5

6

7

8

9