
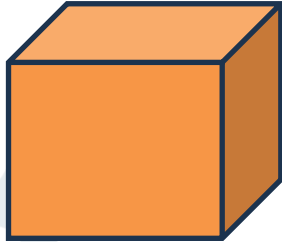

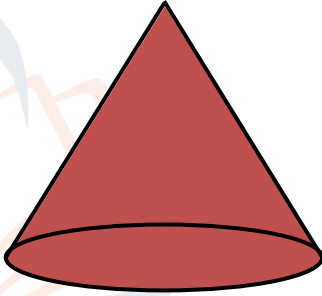
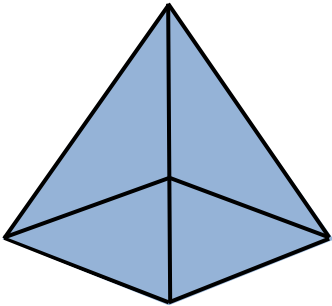



Name - _____

Start time - ___ : ___

End time - ___ : ___

Identify each 3D shape, and check the appropriate option.

 <ul style="list-style-type: none"><input type="checkbox"/> prism<input type="checkbox"/> cylinder<input type="checkbox"/> cone	 <ul style="list-style-type: none"><input type="checkbox"/> cube<input type="checkbox"/> cylinder<input type="checkbox"/> sphere
 <ul style="list-style-type: none"><input type="checkbox"/> prism<input type="checkbox"/> pyramid<input type="checkbox"/> cone	 <ul style="list-style-type: none"><input type="checkbox"/> pyramid<input type="checkbox"/> cone<input type="checkbox"/> cube
 <ul style="list-style-type: none"><input type="checkbox"/> pyramid<input type="checkbox"/> cylinder<input type="checkbox"/> cube	 <ul style="list-style-type: none"><input type="checkbox"/> cube<input type="checkbox"/> sphere<input type="checkbox"/> cone

1

2

3

4

5

6

7

8

9