


Name - _____


Start time - ___ : ___

End time - ___ : ___

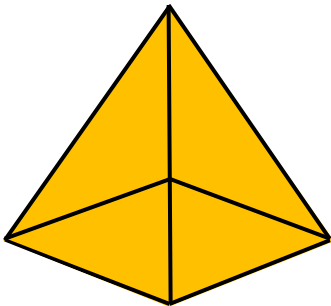
Identify each shape as 2D or 3D, and check the appropriate box.



2D shape 3D shape



2D shape 3D shape



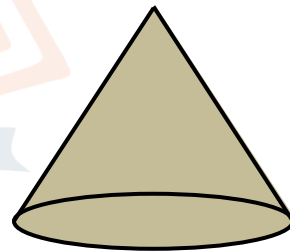
2D shape 3D shape




2D shape 3D shape



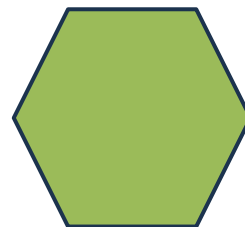
2D shape 3D shape



2D shape 3D shape



2D shape 3D shape



2D shape 3D shape

1

2

3

4

5

6

7

8

9