


Name - _____

Start time - ___ : ___

End time - ___ : ___

Draw a line to match the clocks that show the same time.



1 : 00



4 : 00




3 : 00



6 : 00



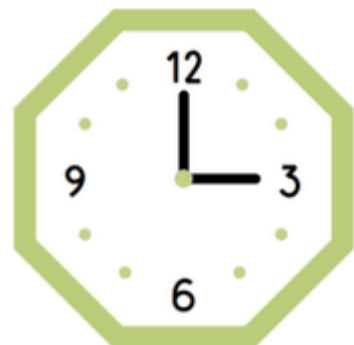
2 : 00



8 : 00



11 : 00



10 : 00

1

2

3

4

5

6

7

8

9