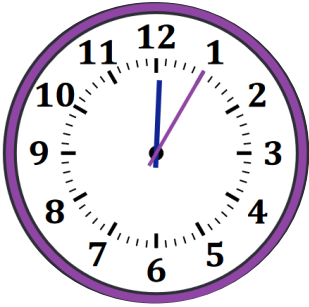


Name - _____

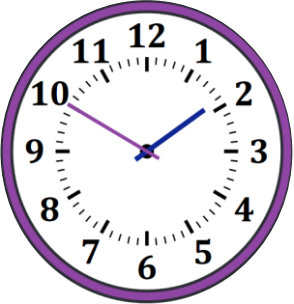
Start time - ___ : ___

End time - ___ : ___

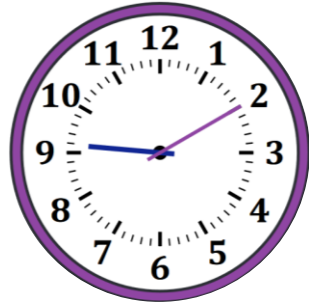
Draw a line to match the clocks that show the same time.



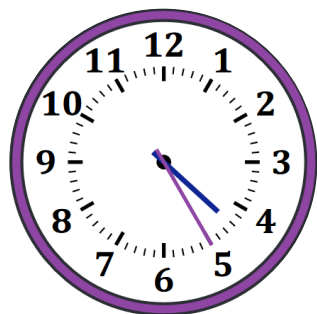
2 : 55



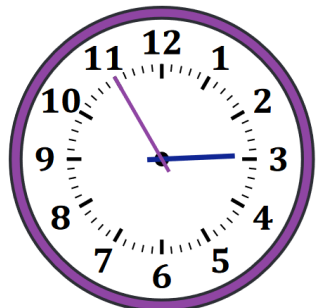
4 : 25



12 : 05



1 : 50



9 : 10



1

2

3

4

5

6

7

8

9