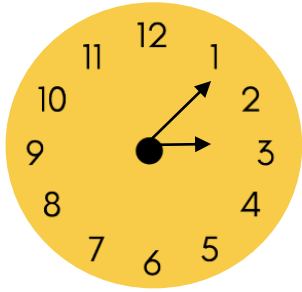


Name - _____

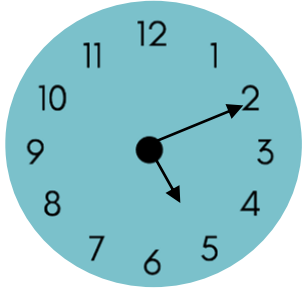
Start time - ___ : ___

End time - ___ : ___

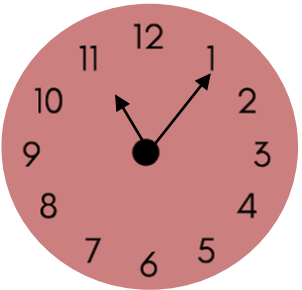
Draw a line to match the clocks that show the same time.



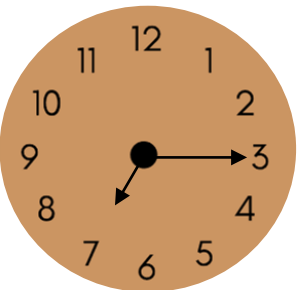
5 : 10



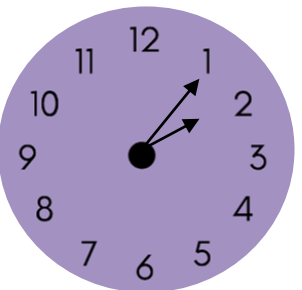
2 : 05



3 : 05



11 : 05



7 : 15



1

2

3

4

5

6

7

8

9