





Name - _____

Start time - ___ : ___

End time - ___ : ___

Draw a line to match the clocks that show the same time.



1

2

3

4

5

6

7

8

9