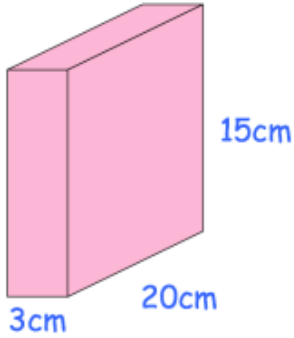
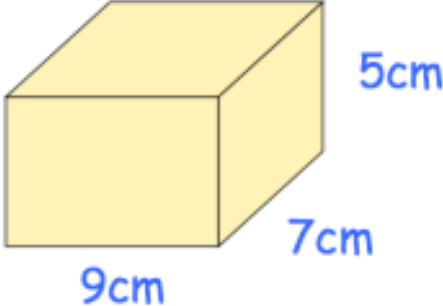
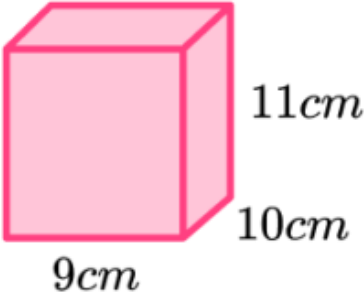
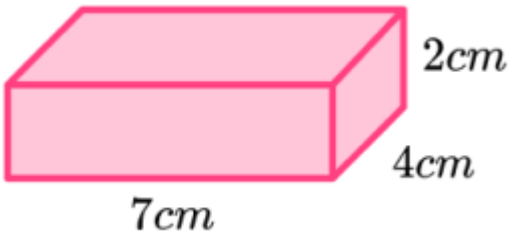
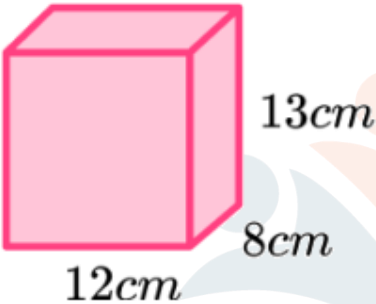
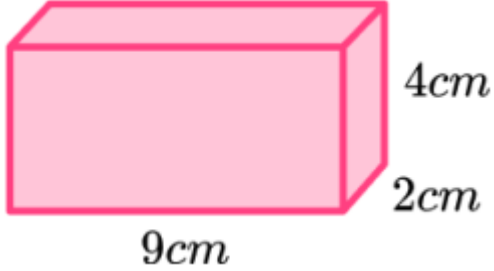
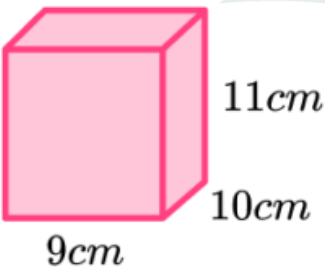
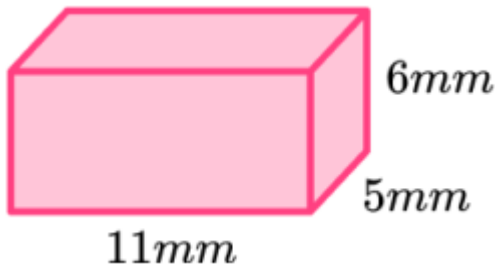
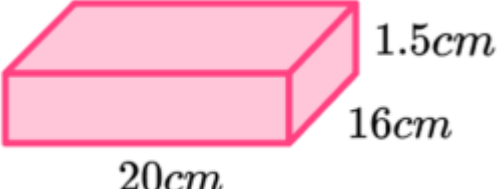
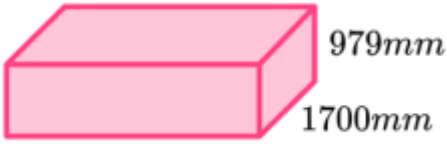


Name - _____

Start time - __: __

End time - __: __

Calculate the surface area of the cuboid:

 <p>3cm 20cm 15cm</p>	 <p>9cm 7cm 5cm</p>
 <p>9cm 10cm 11cm</p>	 <p>7cm 4cm 2cm</p>
 <p>12cm 8cm 13cm</p>	 <p>9cm 2cm 4cm</p>
 <p>9cm 10cm 11cm</p>	 <p>11mm 5mm 6mm</p>
 <p>20cm 16cm 1.5cm</p>	 <p>140cm 1700mm 979mm</p>

1

2

3

4

5

6

7

8

9