

Name - _____


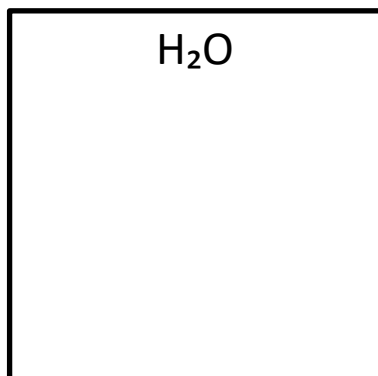

Start time - __ : __

End time - __ : __

Determine whether each compound is ionic or covalent.

1. Calcium Oxide (CaO) - _____
2. Hydrogen Fluoride (HF) - _____
3. Sodium Chloride (NaCl) - _____
4. Water (H₂O) - _____

Draw the Electron Dot Structure for the Following Compounds.



How are ionic compounds used in the production of table salt?

Explain the properties of ionic and covalent compounds.

What is the role of Lewis structures in covalent compounds?
