

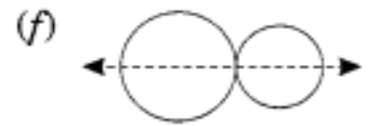
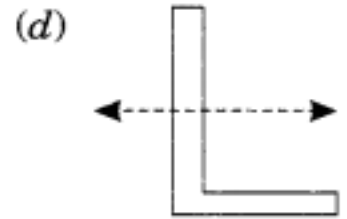
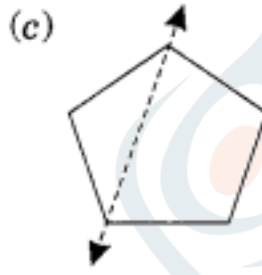
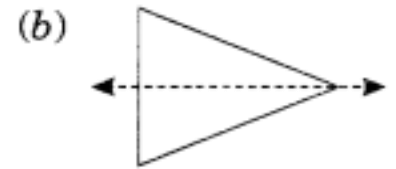
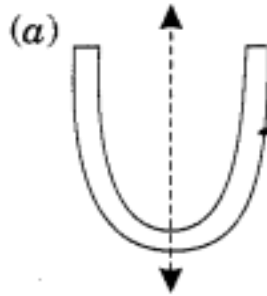
Name - _____

Start time - __: __

End time - __: __

Recognizing Lines of Symmetry : More than One Line:

1. Find in which of the following, the dotted line is a line of symmetry.



2. How many lines of symmetry does (a) a rectangle (b) a square (c) a parallelogram have? What about right angled triangle?
3. An angle is symmetrical about its
4. A circle has lines of symmetry.
5. A rectangle has lines of symmetry.
6. A square has lines of symmetry.
7. A letter D has lines of symmetry.
8. A letter N has lines of symmetry.