


Name - \_\_\_\_\_

Start time - \_\_\_ : \_\_\_


End time - \_\_\_ : \_\_\_

Color the circle green if the given fact of 8 is correct else color it red.


$9 \times 2 = 15$




$8 \times 2 = 16$




$7 \times 5 = 35$




$9 \times 3 = 27$




$8 \times 6 = 72$




$8 \times 7 = 56$




$9 \times 12 = 99$




$7 \times 1 = 7$




$8 \times 6 = 48$




$9 \times 4 = 32$



$7 \times 7 = 49$



$9 \times 8 = 64$



1

2

3

4

5

6

7

8

9