


Name - \_\_\_\_\_


Start time - \_\_\_\_ : \_\_\_\_

End time - \_\_\_\_ : \_\_\_\_


Choose the right answer.


$$10 \times 5 =$$


50      80


$$11 \times 2 =$$


22      55


$$12 \times 8 =$$


96      45


$$11 \times 8 =$$


44      88


$$11 \times 7 =$$


77      44


$$12 \times 5 =$$


20      60


$$12 \times 2 =$$


24      45


$$11 \times 7 =$$


99      77


$$10 \times 9 =$$


90      50


$$12 \times 9 =$$

108      45


$$12 \times 4 =$$

24      48


$$11 \times 10 =$$

110      45

1

2

3

4

5

6

7

8

9