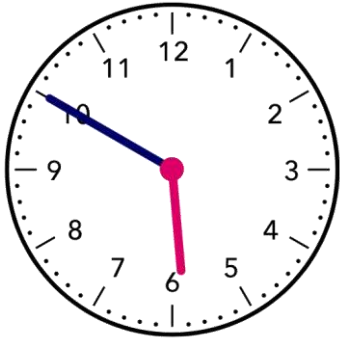


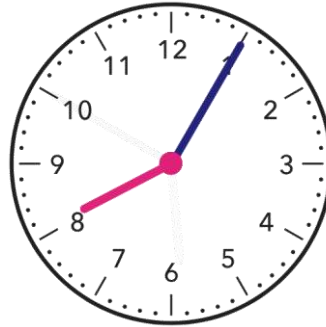
Name - _____

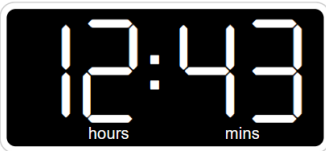
Start time - ___ : ___

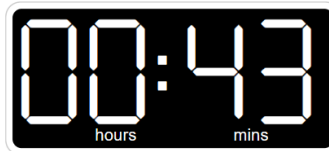
End time - ___ : ___

Write the time:

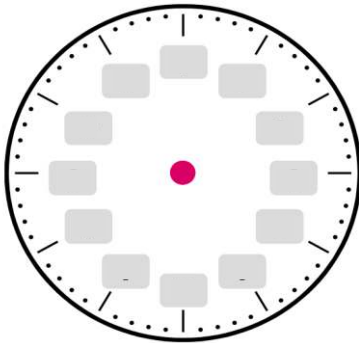




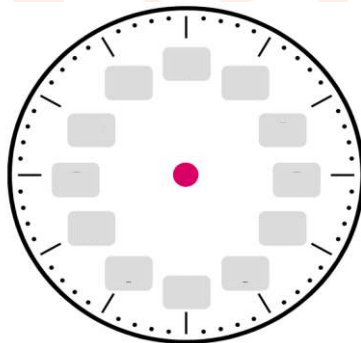




Draw the time:



12 : 00 clock



3 : 40 clock

What time do the clock show?



CHALLENGE

1. Mariah starts her 7-hour shift at 6:15 a.m. What time does Mariah get off from work?
2. It takes Mike 25 minutes to go to work and it takes Ashley 50 minutes to go to work. Today, Mike left home at 8:30 a.m. and Ashley left home at 8:15 a.m. Who arrived at work earlier ?