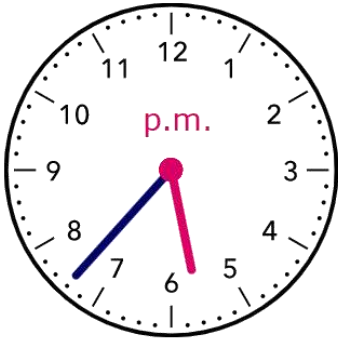


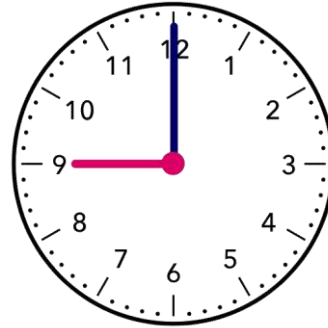
Name - \_\_\_\_\_

Start time - \_\_\_ : \_\_\_

End time - \_\_\_ : \_\_\_

## Write the time:



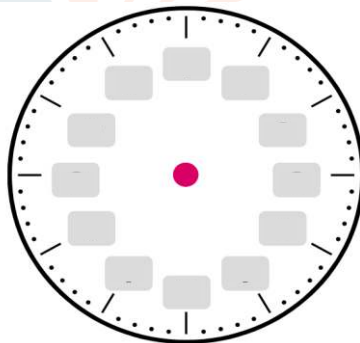
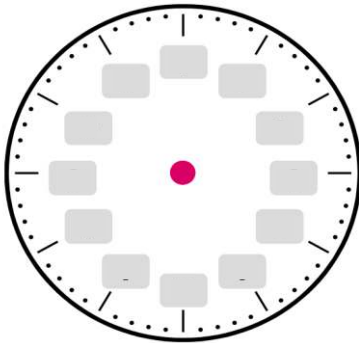







## Draw the time:

## What time do the clock show?




7 : 30 clock

4 : 10 clock

## CHALLENGE

- Lorraine left her home at 9:25 a.m. She arrived at the movie theater at 9:55 a.m., bought a movie ticket, and waited for another 20 minutes before the movie started. How long was it from the time she left her house until the movie began?