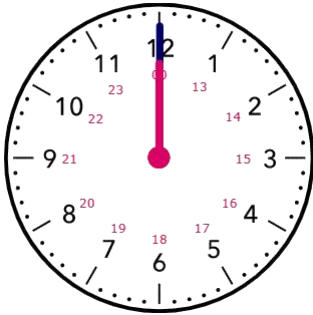


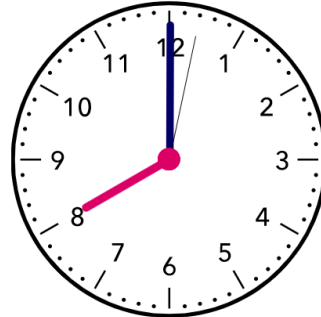
Name - \_\_\_\_\_

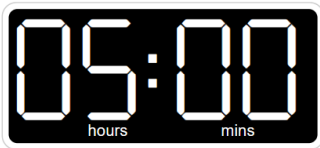
Start time - \_\_\_ : \_\_\_

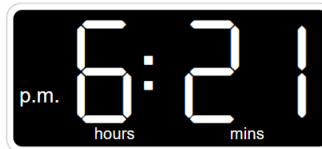
End time - \_\_\_ : \_\_\_

## Write the time:



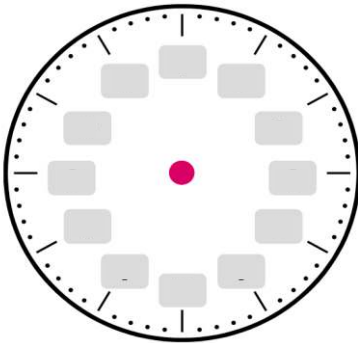




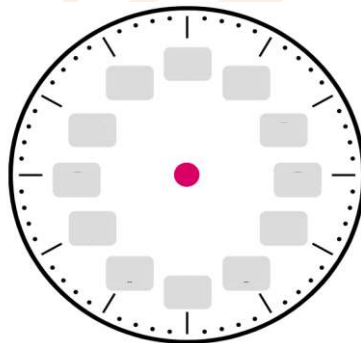



## Draw the time:

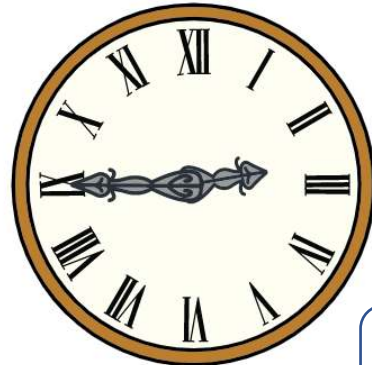
## What time do the clock show?



1 : 50 clock



5 : 25 clock




## **CHALLENGE**

- The train was scheduled to arrive at 5:10 p.m. However, it was delayed for 25 minutes. What time was it when the train arrived?
- All movie viewers left the movie theater at 9:50 p.m. The 5 workers stayed for 35 minutes to clean the movie theater. When did the workers leave the movie theater?