

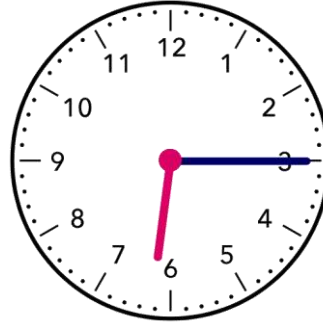
Name - _____

Start time - ___ : ___

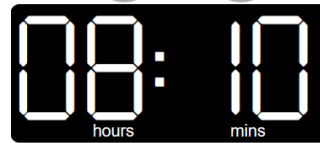
End time - ___ : ___

Write the time:



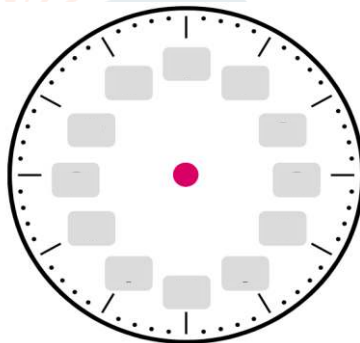
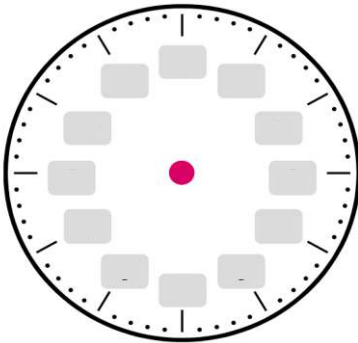






Draw the time:

What time do the clock show?



5 : 10 clock

4 : 50 clock

CHALLENGE

- The train left the terminal at 11:20 a.m. and arrived at its destination at 2:40 p.m. How long did the train travel?
- Jack's meeting started at 2:45 p.m. and ended at 5:25 p.m. How long did the meeting last?