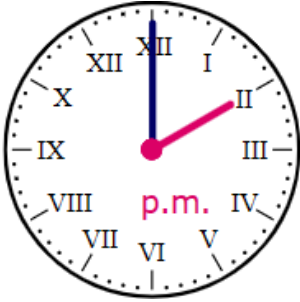



Name - _____

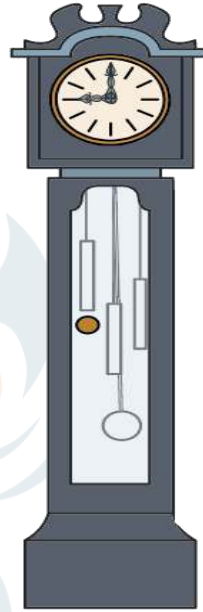
Start time - ___ : ___

End time - ___ : ___

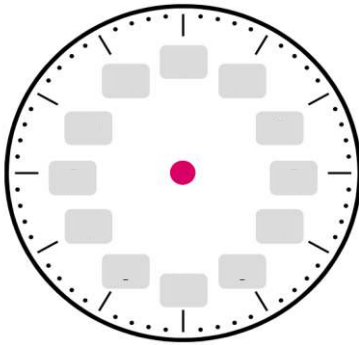
What time do these clocks show?

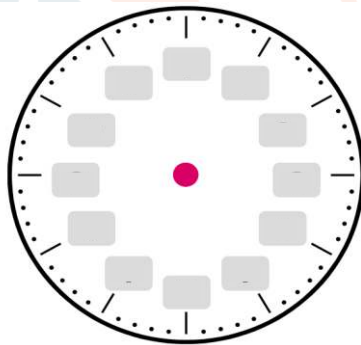


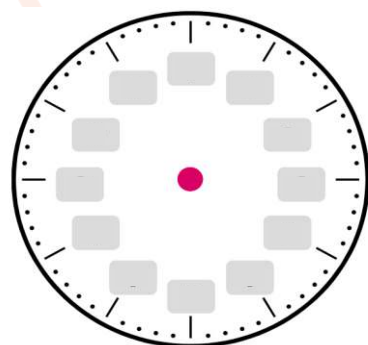




Draw the time:







CHALLENGE

The school opens at 8:35 a.m. Classes start at 9:15 a.m. The two breaks are at 11:00 a.m. and 1:45 p.m. School ends at 3:15 p.m.

- How much time is there between the two breaks?
- The second break is 50 minutes long. When does the second break end?