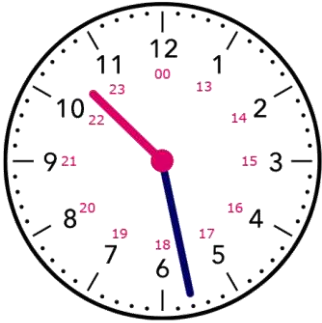


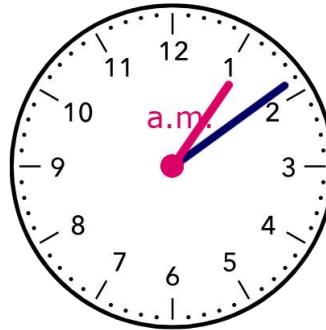
Name - \_\_\_\_\_

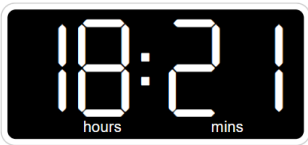
Start time - \_\_\_ : \_\_\_

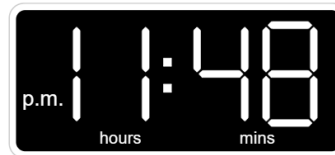
End time - \_\_\_ : \_\_\_

## Write the time:



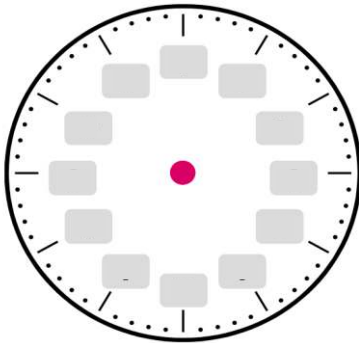




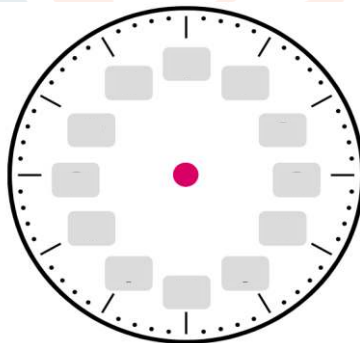



## Draw the time:

## What time do the clock show?



6 : 10 clock



11 : 00 clock




## **CHALLENGE**

- Hugh watched a action movie. The movie was 2 hours and 45 minutes long. He left the movie theater at 4:30 p.m. At what time did the movie start?
- The school opens at 8:35 a.m. Sam arrives at school at 8:20 a.m. today. How much time does he need to wait before the school opens?

1      2      3      4      5      6      7      8      9