

Name - _____

Start time - ___ : ___

End time - ___ : ___

Write the time:

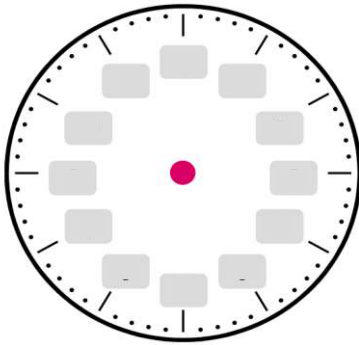




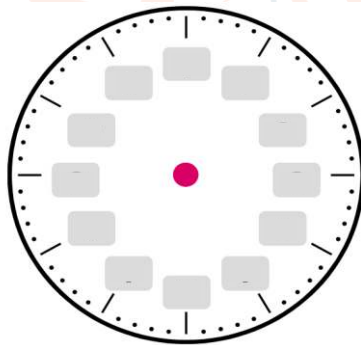




Draw the time:




10 : 00 clock



2 : 45 clock

What time do the clock show?



CHALLENGE

- The bus departs the bus terminal every 2 hours. If the first bus is scheduled to depart at 10:35 a.m., when should the second bus depart?
- Rachel started making her bed at 8:40 AM. She finished at 8:45 AM. How much time has passed ?