

Name - _____

Start time - ___:___

End time - ___:___

Write the time:



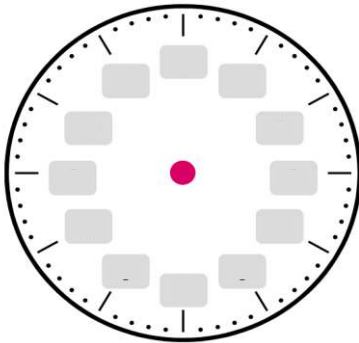




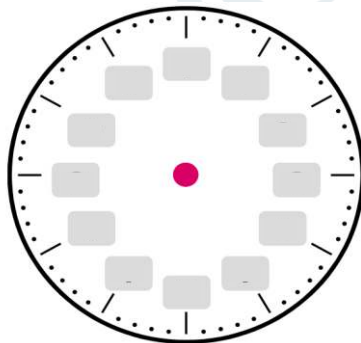


Draw the time:


What time do the clock show?



9 : 50 clock



1 : 30 clock



CHALLENGE

- Destiny started eating her sandwich at 12 :45 PM. She finished her sandwich at 1:00 PM. How much time has passed ?
- Tyler started playing a game with a friend at 5:00 PM. The game was over at 5:40 PM. H ow much time had passed?