



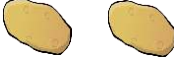





Name - _____

Start time - __ : __

End time - __ : __

Read the pictograph and answer the questions:

Week	Potatoes sold
1	
2	
3	
4	
5	
6	
7	

 = 5 potatoes

The table shows the mass of potatoes sold by a supermarket over four weeks.

- In which week were the most potatoes sold?
- What mass of potatoes was sold in that 3th week?
- What was the total mass of potatoes sold over the four weeks?
.....
- What mass of potatoes was sold in that 2th week?
- What mass of potatoes was sold in that 4th week?
- In which week were the least potatoes sold?
- What was the total mass of potatoes sold over the seven weeks?
.....