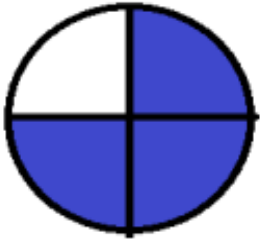


Name - \_\_\_\_\_

Start time - \_\_: \_\_

End time - \_\_: \_\_


Write the fraction. The color parts represent numerator.  
The total parts represent denominator. :



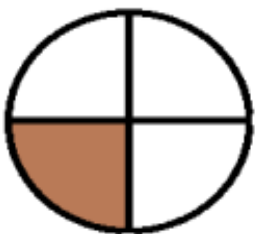
$\frac{1}{2}$	$\frac{3}{4}$	$\frac{1}{4}$	$\frac{1}{3}$
---------------	---------------	---------------	---------------



$\frac{2}{3}$	$\frac{2}{4}$	$\frac{1}{4}$	$\frac{1}{2}$
---------------	---------------	---------------	---------------



$\frac{1}{2}$	$\frac{3}{4}$	$\frac{2}{3}$	$\frac{1}{3}$
---------------	---------------	---------------	---------------



$\frac{2}{4}$	$\frac{3}{4}$	$\frac{1}{4}$	$\frac{1}{3}$
---------------	---------------	---------------	---------------



$\frac{4}{6}$	$\frac{3}{6}$	$\frac{1}{6}$	$\frac{6}{3}$
---------------	---------------	---------------	---------------