


Name - _____

Start time - __: __

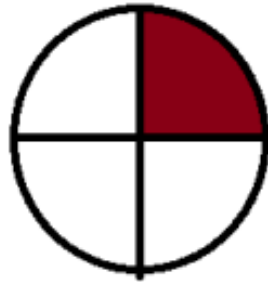
End time - __: __

Write the fraction. The color parts represent numerator.

The total parts represent denominator. :



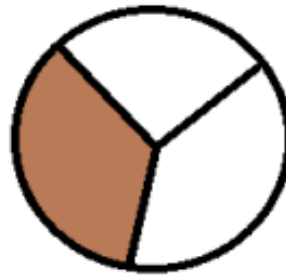
—



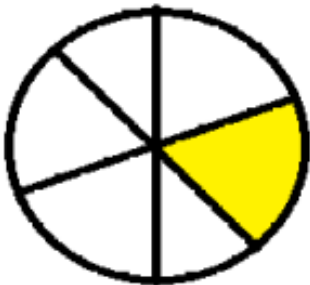
$\frac{1}{4}$



—



—



—



—



—



—

1

2

3

4

5

6

7

8

9