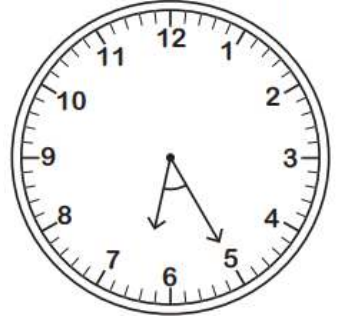
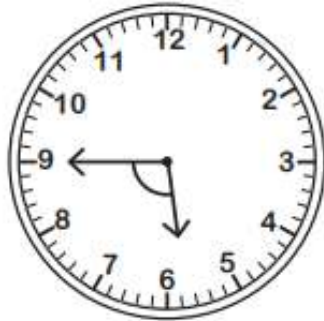
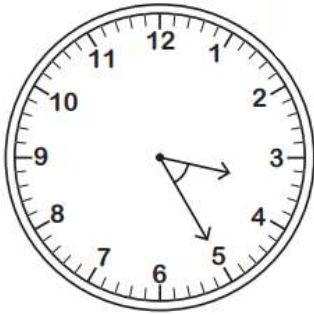


Name - \_\_\_\_\_

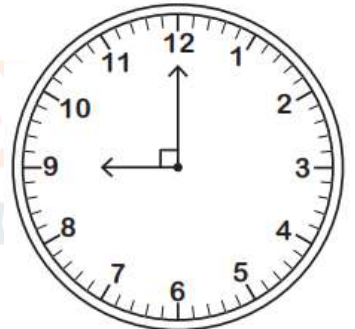
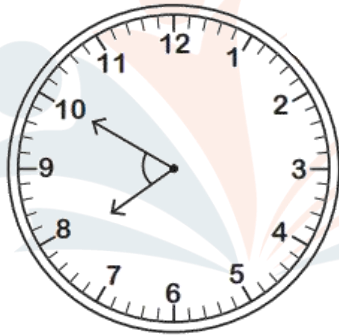
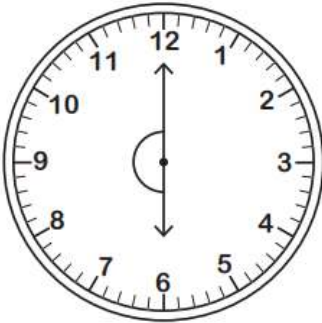
Start time - \_\_ : \_\_

End time - \_\_ : \_\_

Identify the type of angle formed by the hands of each clock.



--	--	--



--	--	--

Identify each angle as acute, right, obtuse, straight, or reflex.

a)  $145^\circ =$  \_\_\_\_\_

b)  $180^\circ =$  \_\_\_\_\_

c)  $29^\circ =$  \_\_\_\_\_


d)  $100^\circ =$  \_\_\_\_\_

e)  $30^\circ =$  \_\_\_\_\_

f)  $70^\circ =$  \_\_\_\_\_

g)  $80^\circ =$  \_\_\_\_\_

**CHALLENGE**



--

1      2      3      4      5      6      7      8      9