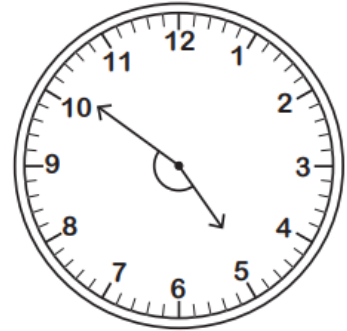
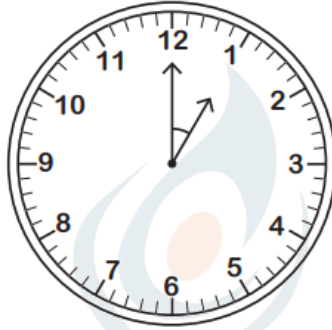
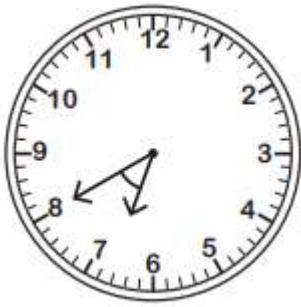


Name - \_\_\_\_\_


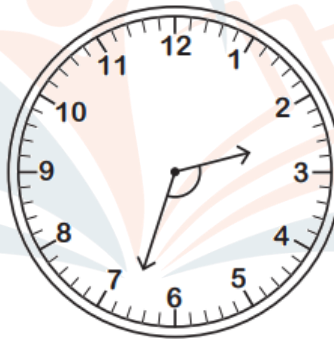
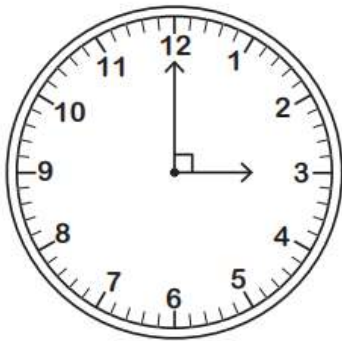
Start time - \_\_: \_\_

End time - \_\_: \_\_

Identify the type of angle formed by the hands of each clock.



--	--	--



--	--	--

Identify each angle as acute, right, obtuse, straight, or reflex.

a)  $10^\circ =$  \_\_\_\_\_

b)  $20^\circ =$  \_\_\_\_\_

c)  $94^\circ =$  \_\_\_\_\_

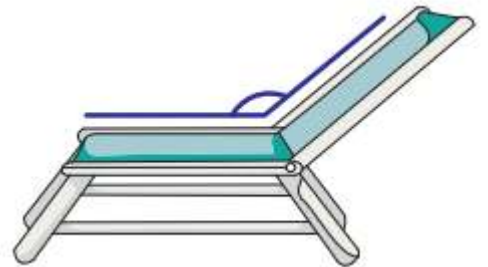
d)  $50^\circ =$  \_\_\_\_\_

e)  $96^\circ =$  \_\_\_\_\_

f)  $90^\circ =$  \_\_\_\_\_

g)  $37^\circ =$  \_\_\_\_\_

**CHALLENGE**



--