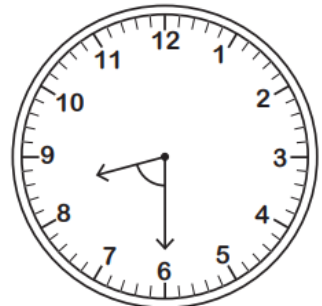
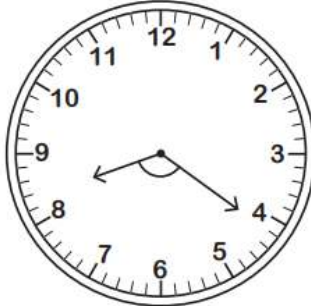
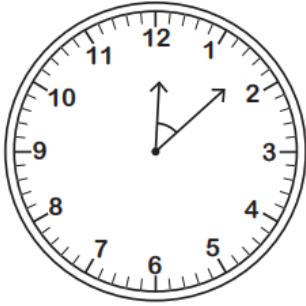


Name - _____

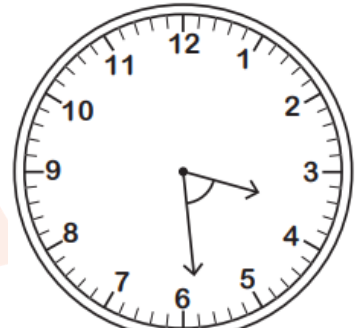
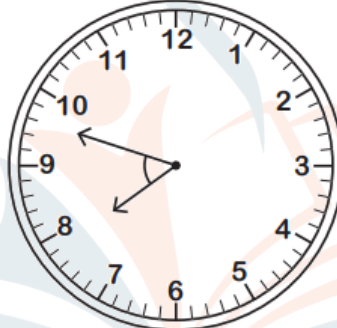
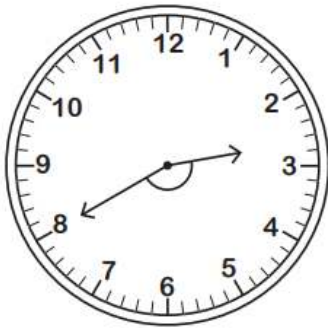
Start time - __: __

End time - __: __

Identify the type of angle formed by the hands of each clock.



| | | |
|--|--|--|
| | | |
|--|--|--|



| | | |
|--|--|--|
| | | |
|--|--|--|

Identify each angle as acute, right, obtuse, straight, or reflex.

a) $32^\circ =$ _____

b) $337^\circ =$ _____

c) $149^\circ =$ _____

d) $171^\circ =$ _____

e) $296^\circ =$ _____

f) $90^\circ =$ _____

g) $317^\circ =$ _____

CHALLENGE



| |
|--|
| |
|--|

1 2 3 4 5 6 7 8 9