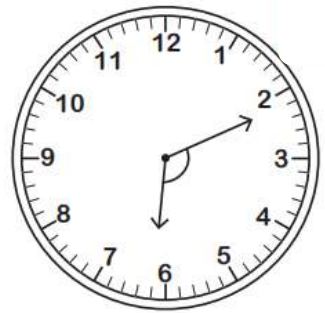
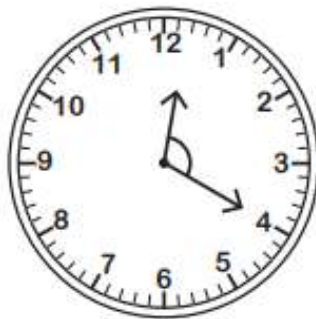
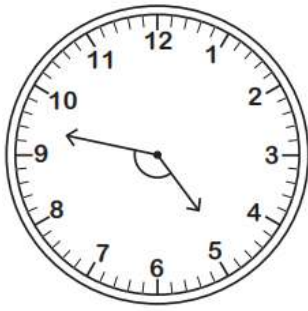


Name - _____

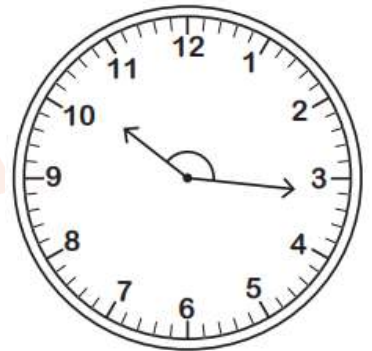

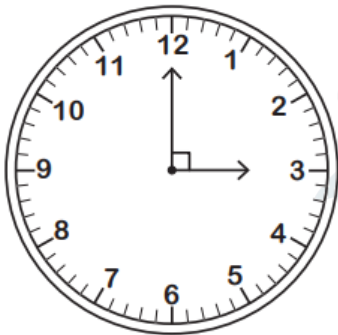
Start time - __: __

End time - __: __

Identify the type of angle formed by the hands of each clock.



--	--	--



--	--	--

Identify each angle as acute, right, obtuse, straight, or reflex.

a) $37^\circ =$ _____

b) $47^\circ =$ _____

c) $5^\circ =$ _____

d) $123^\circ =$ _____

e) $135^\circ =$ _____

f) $88^\circ =$ _____

g) $161^\circ =$ _____

CHALLENGE



--

1 2 3 4 5 6 7 8 9