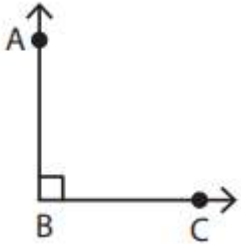


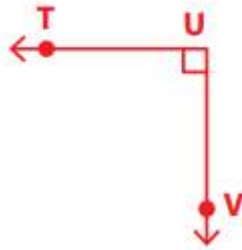
Name - \_\_\_\_\_

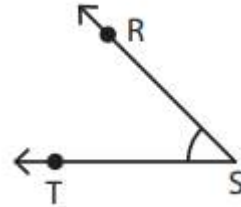
Start time - \_\_: \_\_

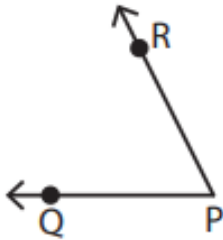
End time - \_\_: \_\_

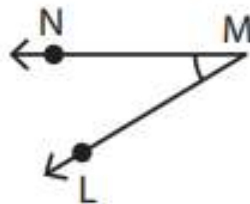
Identify the vertex and arms that form each angle:

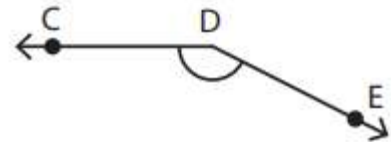













Draw an angle with the given vertex and arms.

Vertex: T &

Arms:

UT, TV

Vertex: D &

Arms:

CD, DE

Vertex: I &

Arms:

KI, IJ

Vertex: N &

Arms:

MN, NO

1

2

3

4

5

6

7

8

9