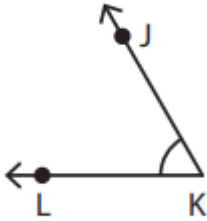


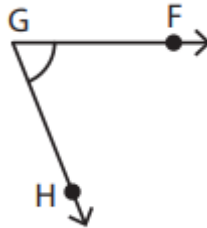
Name - _____

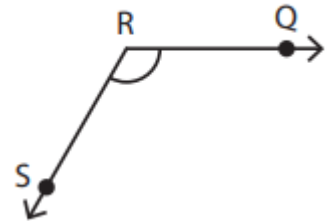
Start time - __ : __

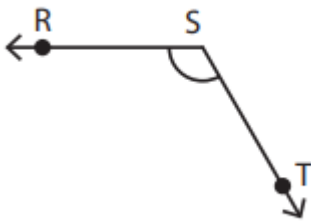
End time - __ : __

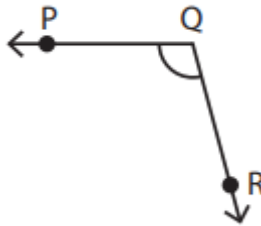
Identify the vertex and arms that form each angle:

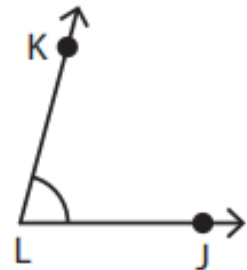












Draw an angle with the given vertex and arms.

Vertex: E &

Arms:

ED, EF

Vertex: Q &

Arms:

PQ, QR

Vertex: Y &

Arms:

XY, YZ

Vertex: B &

Arms:

AB, BC