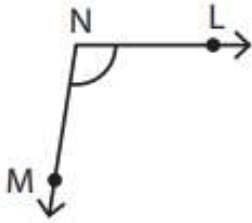


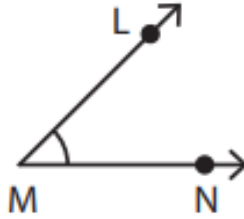
Name - _____

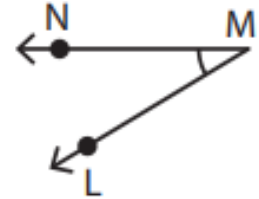
Start time - __: __

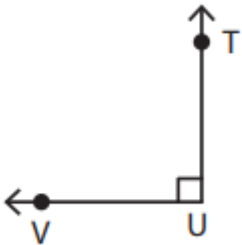
End time - __: __

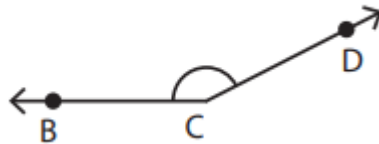
Identify the vertex and arms that form each angle:

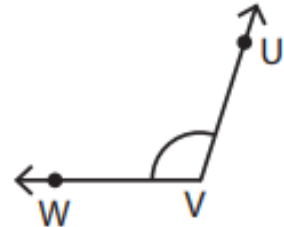












Draw an angle with the given vertex and arms.

Vertex: Z &

Arms:

XZ, ZY

Vertex: R &

Arms:

PR, RQ

Vertex: Y &

Arms:

XY, YZ

Vertex: A &

Arms:

CA, AB

1

2

3

4

5

6

7

8

9