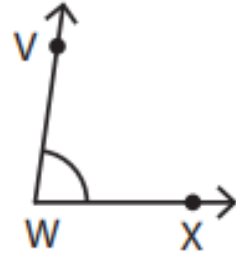

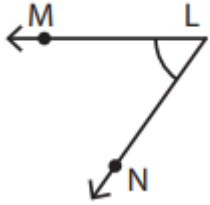


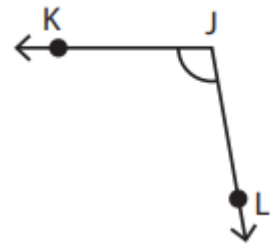
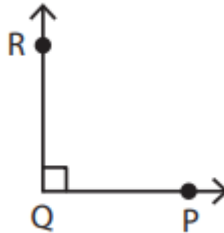
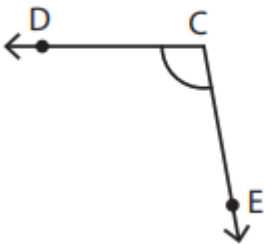
Name - _____

Start time - __: __

End time - __: __

Identify the vertex and arms each angle:





Draw an angle with the given vertex and arms.

Vertex: R &

Arms:

SR, RT

Vertex: V &

Arms:

UV, VW

Vertex: N &

Arms:

LN, NM

Vertex: B &

Arms:

CB, BD