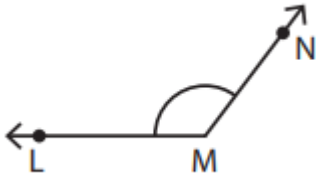


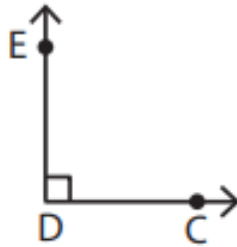
Name - _____

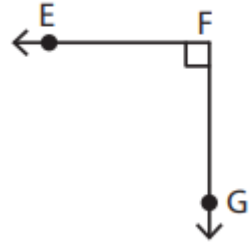
Start time - __: __

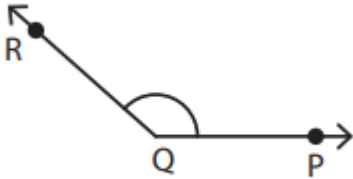
End time - __: __

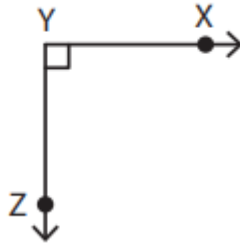
Identify the vertex and arms that form each angle:

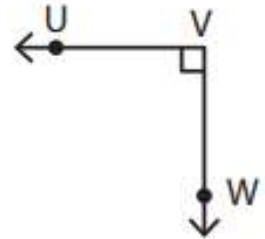












Draw an angle with the given vertex and arms.

Vertex: G &

Arms:

HG, GF

Vertex: L &

Arms:

KL, LG

Vertex: D &

Arms:

ED, DF

Vertex: Y &

Arms:

EY, YU

1

2

3

4

5

6

7

8

9