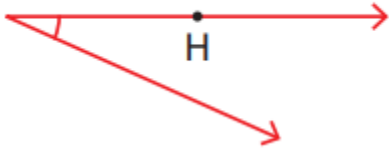


Name - _____

Start time - __: __

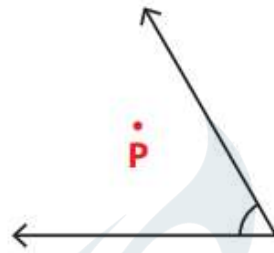
End time - __: __

Identify if the given point is in the interior, exterior, or on the angle as well as if the angle is acute, right or obtuse angle:



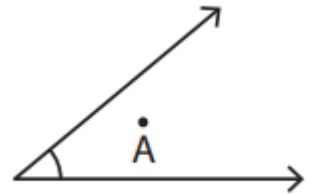
Point :

Angle type :



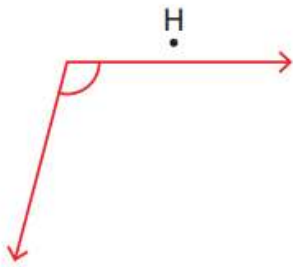
Point :

Angle type :



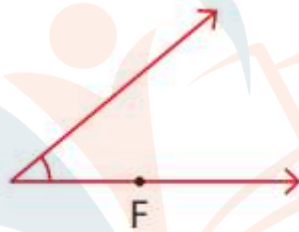
Point :

Angle type :



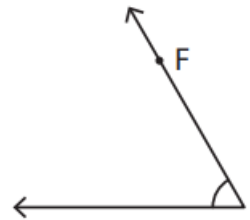
Point :

Angle type :



Point :


Angle type :



Point :

Angle type :

Mark a point C in the exterior of the angle.



Draw an angle with the point H lying on it.

