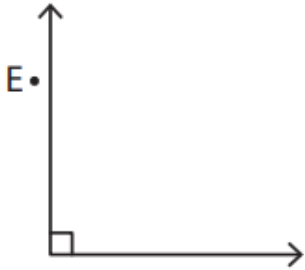


Name - _____

Start time - __ : __

End time - __ : __

Identify if the given point is in the interior, exterior, or on the angle as well as if the angle is acute, right or obtuse angle:



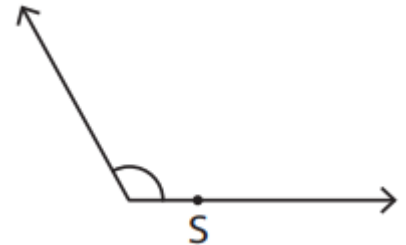
Point :

Angle type :



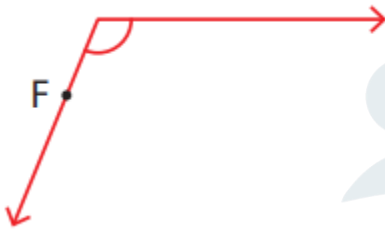
Point :

Angle type :



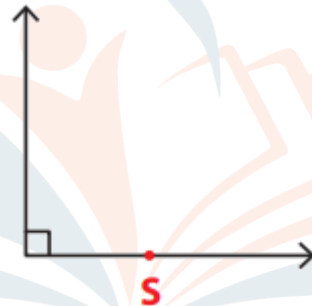
Point :

Angle type :



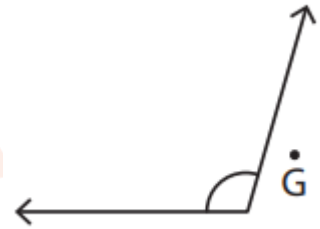
Point :

Angle type :



Point :


Angle type :



Point :

Angle type :

Mark a point S on the angle.



Draw an angle having the point N in its exterior.

