

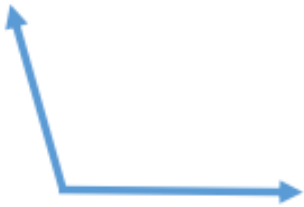
Name - _____

Start time - __ : __

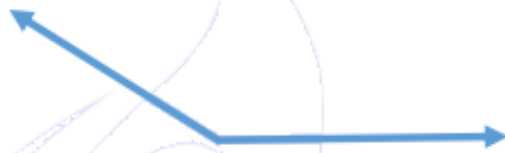
End time - __ : __

Tell whether the angles are acute, obtuse and right angles :

1.



2.



3.



4.



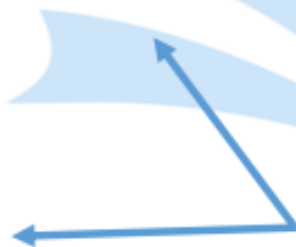
5.



6.



7.



8.



1

2

3

4

5

6

7

8

9