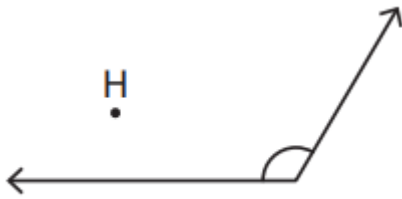


Name - _____

Start time - __ : __

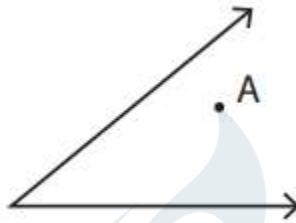
End time - __ : __

Identify if the given point is in the interior, exterior, or on the angle as well as if the angle is acute, right or obtuse angle:



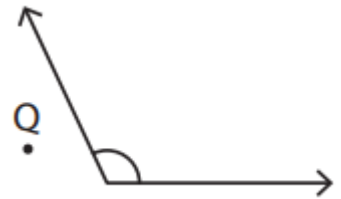
Point :

Angle type :



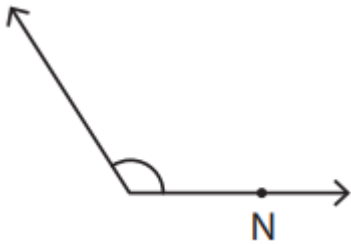
Point :

Angle type :



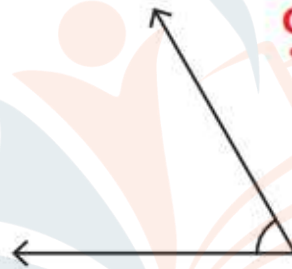
Point :

Angle type :



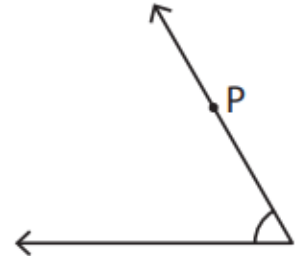
Point :

Angle type :



Point :


Angle type :



Point :

Angle type :

Draw an angle having the point H in its exterior



Mark a point F in the interior of the angle.

