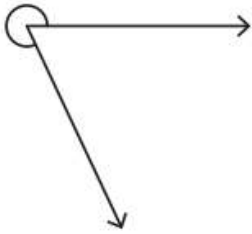


Name - _____

Start time - __: __

End time - __: __

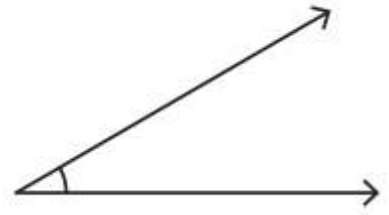
Measure and classify each angle using a protractor.



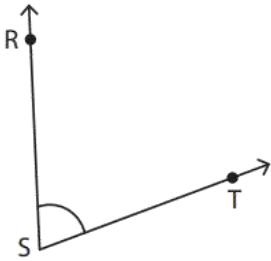
Measure :
Angle :



Measure :
Angle :



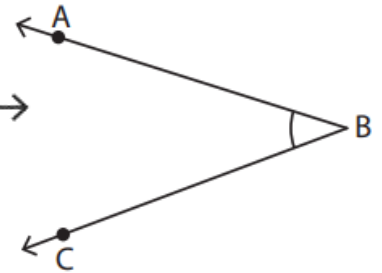
Measure :
Angle :



Measure :
Angle :



Measure :
Angle :



Measure :
Angle :

Draw angle using a protractor and write its measurement too:

47°



123°

