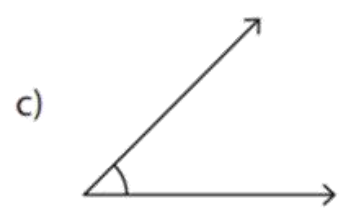


Name - _____

Start time - __: __

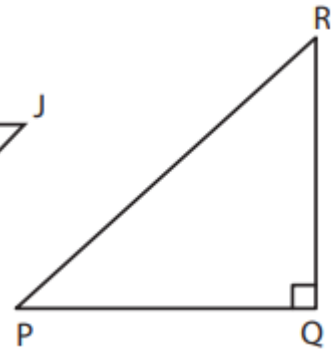
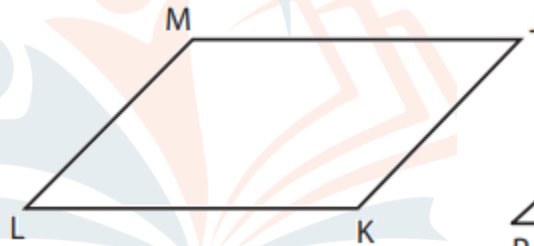
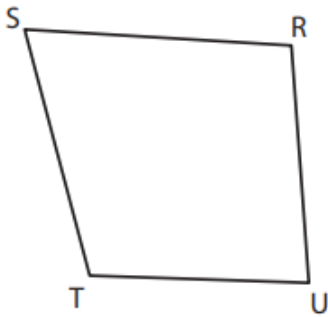
End time - __: __

Identify each angle as acute, right, obtuse, straight, or reflex.



--	--	--

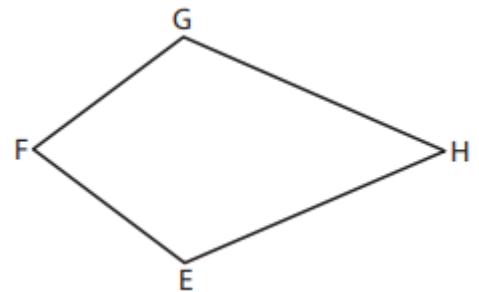
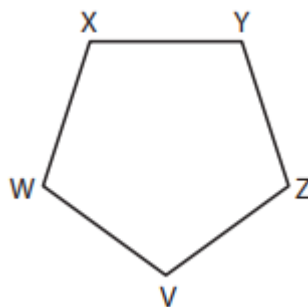
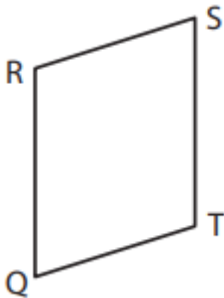
CHALLENGE Identify the type of each indicated angle.



Angle STU = _____

Angle LKJ = _____

Angle RQP = _____



Angle RQT = _____

Angle YXW = _____

Angle FEH = _____